










Name: \_\_\_\_\_

Date: \_\_\_\_\_



# LONG, LONGER, LONGEST

Which one is it? Number the following groups with 1, 2, and 3 to show which one is long, longer, and longest?



PREVIEW

Gain unlimited access to a large collection of interactive digital and print Maths resources

If you are a member,  
please login to  
download this  
worksheet



If you are NOT a  
member, please sign  
up to gain complete  
access



[www.skoolmaths.com](http://www.skoolmaths.com)

Name: \_\_\_\_\_

Date: \_\_\_\_\_



# LONG, LONGER, LONGEST

Which one is it? Number the following groups with 1, 2, and 3 to show which one is long, longer, and longest.

1



2



3



PREVIEW

Gain unlimited access to a large collection of interactive digital and print Maths resources

If you are a member,  
please login to  
download this  
worksheet



If you are NOT a  
member, please sign  
up to gain complete  
access



[www.skoolmaths.com](http://www.skoolmaths.com)

2



1



3



2



3



1

