


Name: _____

Date: _____




Ladybird Doubles

Count the objects and complete each doubles fact.

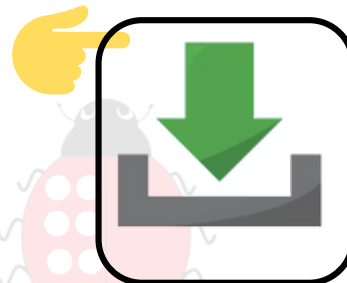
PREVIEW

Gain unlimited access to a large collection of interactive digital and print Maths resources

3. NOT a member? please
sign up to gain complete
access




4. If you are a member, please
login to download this
worksheet




Double 1 = _____

Double 8 = _____




Double 4 = _____



Double 7 = _____



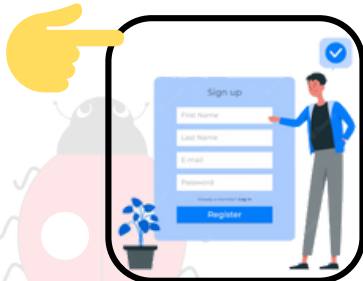


Ladybird Doubles

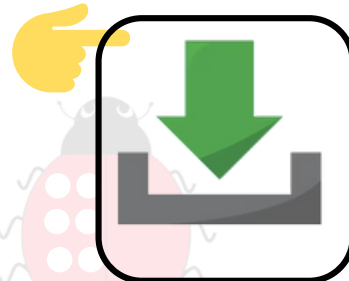
PREVIEW

Gain unlimited access to a large collection of interactive digital and print Maths resources

3. NOT a member? please
sign up to gain complete
access **10**




4. If you are a member, please
login to download this
worksheet **12**




Double 1 = **2**

Double 8 = **16**



Double 4 = **8**



Double 7 = **14**

