

Name: _____

Date: _____



Longer or Shorter?

Draw a circle round the correct object in each case.

Which is longer?

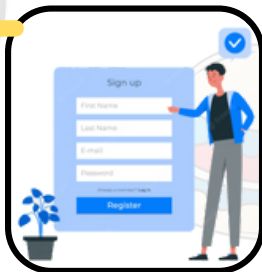
 Which is shorter?

PREVIEW


Gain unlimited access to a large collection of interactive digital and print Maths resources

NOT a member? please sign up to gain complete access


If you are a member, please login to download this worksheet



Which is longer?



Which is shorter?



Name:

Date:



Longer or Shorter?

Answers

Which is longer?


 Which is shorter?

PREVIEW


Gain unlimited access to a large collection of interactive digital and print Maths resources

NOT a member? please sign up to gain complete access

If you are a member, please login to download this worksheet



Which is longer?



Which is shorter?

