

Name: _____ Class: _____

Missing Dots

Complete the dots to make the statement true:

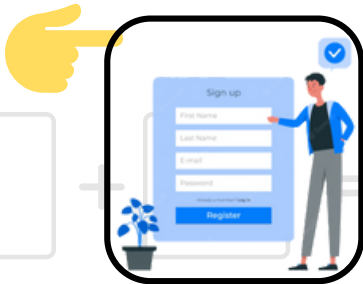
$$\begin{array}{|c|} \hline \bullet \bullet \\ \hline \bullet \\ \hline \bullet \bullet \\ \hline \end{array} + \begin{array}{|c|} \hline \\ \hline \\ \hline \\ \hline \end{array} = 10 \quad \begin{array}{|c|} \hline \bullet \bullet \\ \hline \bullet \bullet \\ \hline \\ \hline \end{array} + \begin{array}{|c|} \hline \\ \hline \\ \hline \\ \hline \end{array} = 5$$

PREVIEW

Gain unlimited access to a large collection of interactive digital and print Maths resources

NOT a member? please sign up to gain complete access

If you are a member, please login to download this worksheet



$$\begin{array}{|c|} \hline \\ \hline \\ \hline \\ \hline \end{array} + \begin{array}{|c|} \hline \bullet \\ \hline \\ \hline \bullet \\ \hline \end{array} = 3$$

$$\begin{array}{|c|} \hline \\ \hline \\ \hline \\ \hline \end{array} + \begin{array}{|c|} \hline \bullet \bullet \\ \hline \bullet \bullet \\ \hline \bullet \bullet \\ \hline \end{array} = 8$$

$$\begin{array}{|c|} \hline \bullet \\ \hline \\ \hline \\ \hline \end{array} + \begin{array}{|c|} \hline \\ \hline \\ \hline \\ \hline \end{array} = 5$$

$$\begin{array}{|c|} \hline \bullet \bullet \\ \hline \bullet \bullet \\ \hline \\ \hline \end{array} + \begin{array}{|c|} \hline \\ \hline \\ \hline \\ \hline \end{array} = 9$$

Missing Dots

Complete the dots to make the statement true:

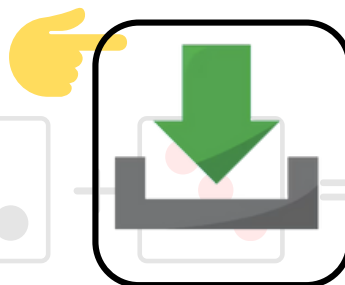

$$\begin{array}{|c|} \hline \bullet \bullet \\ \hline \bullet \\ \hline \bullet \bullet \\ \hline \end{array} + \begin{array}{|c|} \hline \bullet \bullet \\ \hline \bullet \\ \hline \bullet \bullet \\ \hline \end{array} = 10 \quad \begin{array}{|c|} \hline \bullet \bullet \\ \hline \bullet \bullet \\ \hline \bullet \bullet \\ \hline \end{array} + \begin{array}{|c|} \hline \bullet \\ \hline \bullet \\ \hline \bullet \\ \hline \end{array} = 5$$

PREVIEW

Gain unlimited access to a large collection of interactive digital and print Maths resources

NOT a member? please
sign up to gain complete
access

If you are a member, please
login to download this
worksheet



$$\begin{array}{|c|} \hline \bullet \\ \hline \end{array} + \begin{array}{|c|} \hline \bullet \\ \hline \bullet \\ \hline \end{array} = 3$$

$$\begin{array}{|c|} \hline \bullet \bullet \\ \hline \bullet \\ \hline \end{array} + \begin{array}{|c|} \hline \bullet \bullet \\ \hline \bullet \bullet \\ \hline \bullet \bullet \\ \hline \end{array} = 8$$

$$\begin{array}{|c|} \hline \bullet \\ \hline \end{array} + \begin{array}{|c|} \hline \bullet \bullet \\ \hline \bullet \bullet \\ \hline \end{array} = 5$$

$$\begin{array}{|c|} \hline \bullet \bullet \\ \hline \bullet \bullet \\ \hline \end{array} + \begin{array}{|c|} \hline \bullet \bullet \\ \hline \bullet \bullet \\ \hline \bullet \bullet \\ \hline \end{array} = 9$$

