



Name: _____

Date: _____



2D Shapes - Counting Sides

The first one is done for you.

	Name	sides
	Triangle	3
		
		
		
		
		

PREVIEW

Gain unlimited access to a large collection of interactive digital and print Maths resources


If you are a member,
please login to
download this
worksheet



If you are NOT a
member, please sign
up to gain complete
access



www.skoolmaths.com



Name

sides

Triangle

3



PREVIEW

Gain unlimited access to a large collection of interactive digital and print Maths resources

If you are a member,
please login to
download this
worksheet

If you are NOT a
member, please sign
up to gain complete
access



www.skoolmaths.com