


Name: _____

Date: _____

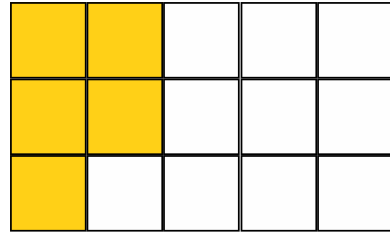
Identifying Fractions

Identify the numerator and the denominator in each fraction shown below:



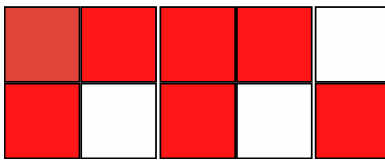
Numerator:

Denominator:



Numerator:

Denominator:



Numerator:

Denominator:

Gain unlimited access to a large collection of interactive digital and print Maths resources


If you are a member, please login to download this worksheet



If you are NOT a member, please sign up to gain complete access



www.skoolmaths.com



Numerator:

Denominator:



Numerator:


Denominator:

Name:

Date:

Identifying Fractions

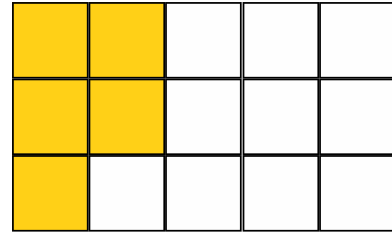
Identify the numerator and the denominator in each fraction shown below: **Answer Key**



Numerator:

4

Denominator:

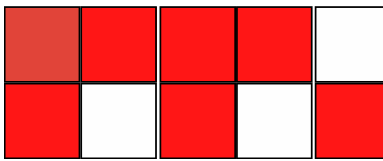


Numerator:

5

Denominator:

15



Numerator:


Denominator:

Gain unlimited access to a large collection of interactive digital and print Maths resources

If you are a member, please login to download this worksheet



If you are NOT a member, please sign up to gain complete access




Numerator:

1

Denominator:

7



Numerator:

3

Denominator:

4



Numerator:

5

Denominator:

6

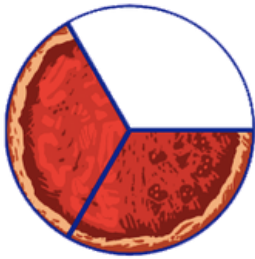
www.skoolmaths.com

Name: _____

Date: _____


Identifying Fractions

Identify the numerator and the denominator in each fraction shown below:



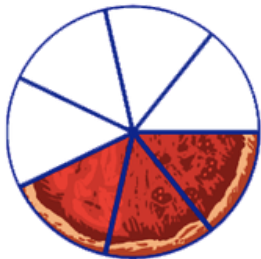
Numerator:

Denominator:



Numerator:

Denominator:



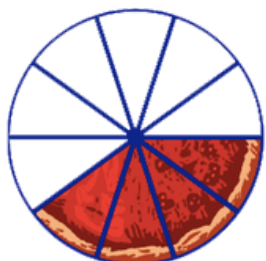
Numerator:

Denominator:



Numerator:

Denominator:



Numerator:

Denominator:



Numerator:

Denominator:

PREVIEW

Gain unlimited access to a large collection of interactive digital and print Maths resources

If you are a member, please login to download this worksheet



If you are NOT a member, please sign up to gain complete access



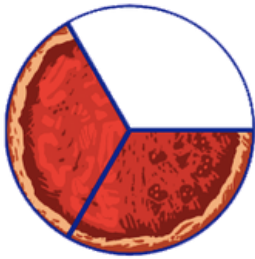
www.skoolmaths.com

Name: _____

Date: _____

Identifying Fractions


Identify the numerator and the denominator in each fraction shown below: **Answer Key**



Numerator:

2

Denominator:

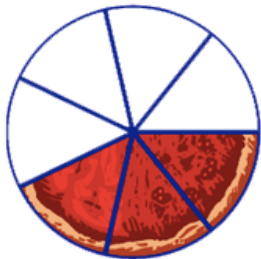


Numerator:

4

Denominator:

8



Numerator:

Denominator:



Numerator:

8

Denominator:

12

PREVIEW

Gain unlimited access to a large collection of interactive digital and print Maths resources

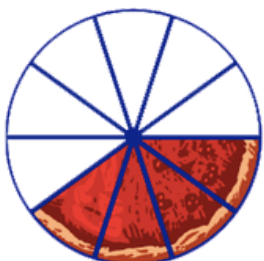
If you are a member, please login to download this worksheet



If you are NOT a member, please sign up to gain complete access



www.skoolmaths.com



Numerator:

4

Denominator:

10



Numerator:

3

Denominator:

21