









Name: _____

Date: _____

Determine which representation best represents each fraction.

1) Which choice best represents $\frac{1}{3}$? A.  B.  C.  D. 

2) Which choice best represents $\frac{1}{4}$? A.  B.  C.  D. 

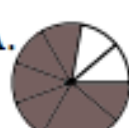



3) Which choice best represents $\frac{4}{6}$? A.  B.  C.  D. 





4) Which choice best represents $\frac{1}{8}$? A.  B.  C.  D. 

5) Which choice best represents $\frac{3}{4}$? A.  B.  C.  D. 

6) Which choice best represents $\frac{1}{2}$? A.  B.  C.  D. 

7) Which choice best represents $\frac{3}{8}$? A.  B.  C.  D. 

8) Which choice best represents $\frac{6}{8}$? A.  B.  C.  D. 



9) Which choice best represents $\frac{3}{4}$? A.  B.  C.  D. 

PREVIEW

Gain unlimited access to a large collection of interactive digital and print Maths resources

If you are a member, please login to download this worksheet

If you are NOT a member, please sign up to gain complete access



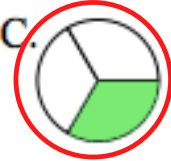




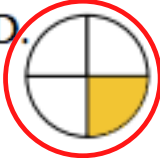



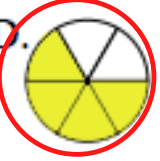




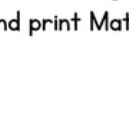


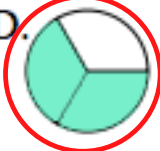






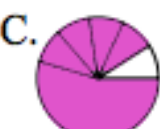








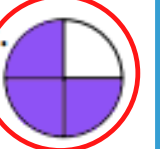


www.skoolmaths.com

Name: _____

Date: _____

Answer Key

- 1) Which choice best represents $\frac{1}{3}$? A.  B.  C.  D. 
- 2) Which choice best represents $\frac{1}{4}$? A.  B.  C.  D. 
- 3) Which choice best represents $\frac{4}{6}$? A.  B.  C.  D. 
- 4) Which choice best represents $\frac{1}{8}$? A.  B.  C.  D. 
- 5) Which choice best represents $\frac{2}{3}$? A.  B.  C.  D. 
- 6) Which choice best represents $\frac{1}{2}$? A.  B.  C.  D. 
- 7) Which choice best represents $\frac{3}{4}$? A.  B.  C.  D. 
- 8) Which choice best represents $\frac{6}{8}$? A.  B.  C.  D. 
- 9) Which choice best represents $\frac{3}{4}$? A.  B.  C.  D. 

PREVIEW

Gain unlimited access to a large collection of interactive digital and print Maths resources

If you are a member, please login to download this worksheet

If you are NOT a member, please sign up to gain complete access



www.skoolmaths.com