

Name: _____

Date: _____

Electricity

Place the words from the word bank into the right place to complete the sentences and labels.

1. Washing machines, mobile phones, televisions and kettles are all examples of electrical _____.
2. Write the headings for this table.

Examples of _____


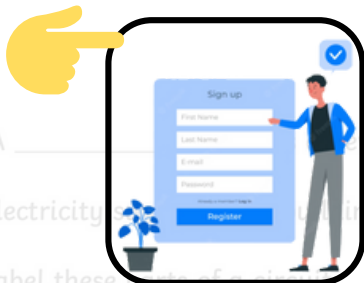
PREVIEW

Gain unlimited access to a large collection of interactive digital and print Maths resources

NOT a member? please sign up to gain complete access

If you are a member, please login to download this worksheet

3. This is an example of a complete _____.
4. A _____ is a device that stores electrical energy.
5. Electricity _____ through wires is called _____.
6. Label these _____.







motor

battery

bulb

buzzer

cell

electrical insulator

mains electricity

electricity

wire

electrical conductor

switch

Answers

Electricity

Place the words from the word bank into the right place to complete the sentences and labels.

1. Washing machines, mobile phones, televisions and kettles are all examples of electrical **appliances**.
2. Write the headings for this table.

Examples of Electrical Conductors

PREVIEW

itors

Gain unlimited access to a large collection of interactive digital and print Maths resources

plastic


NOT a member? please sign up to gain complete access

If you are a member, please login to download this worksheet

metals, such as copper, steel and gold

rubber

3. This is an example of a complete circuit.



4. A **battery** is a source of electrical energy.
5. Electricity that flows through wires is called **mains electricity**.
6. Label these parts of a circuit.



switch



motor



buzzer

motor

battery

bulb

buzzer

cell

electrical insulator

mains electricity

electricity

wire

electrical conductor

switch