



Name: _____

Date: _____

ISOMETRIC DRAWINGS

Draw the following blocks on the Isometric graphs provided under it.



Gain unlimited access to a large collection of interactive digital and print Maths resources

If you are a member,
please login to
download this
worksheet

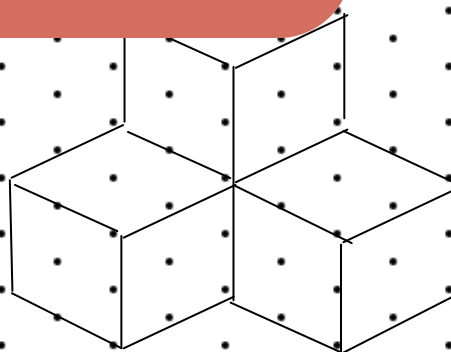

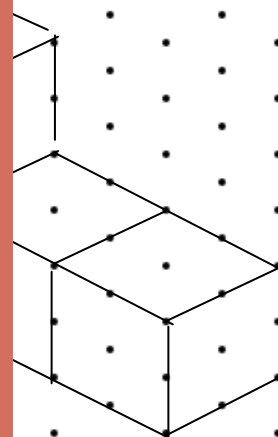

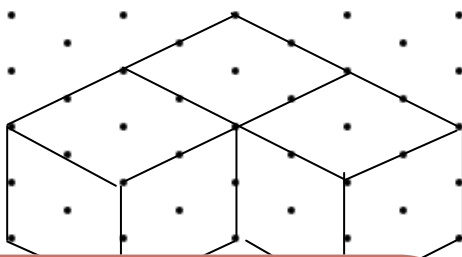



If you are NOT a
member, please sign
up to gain complete
access



ISOMETRIC DRAWINGS

Answers



PREVIEW

Gain unlimited access to a large collection of interactive digital and print Maths resources

If you are a member,
please login to
download this
worksheet



If you are NOT a
member, please sign
up to gain complete
access



www.skoolmaths.com