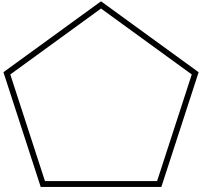


Name: _____

Date: _____

2D SHAPES – GEOMETRIC NAMES

Complete the name of each 2D Shape.



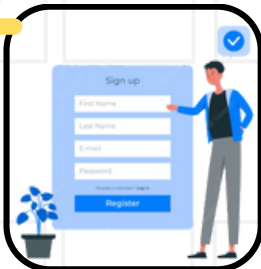
P

PREVIEW

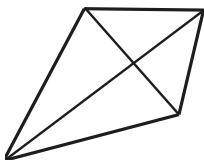
Gain unlimited access to a large collection of interactive digital and print Maths resources

S

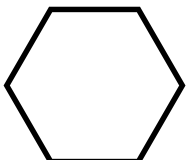
NOT a member? please
sign up to gain complete
access



If you are a member, please
login to download this
worksheet



K

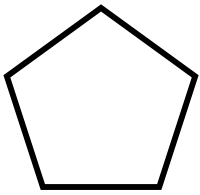


H



2D SHAPES – GEOMETRIC NAMES

Answers



P

E

N

T

A

G

O

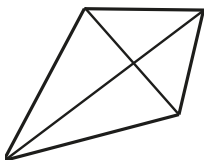

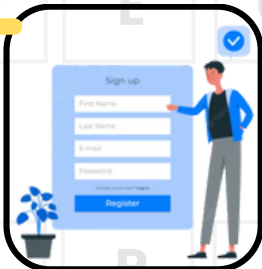
N

PREVIEW

Gain unlimited access to a large collection of interactive digital and print Maths resources

NOT a member? please
sign up to gain complete
access

If you are a member, please
login to download this
worksheet

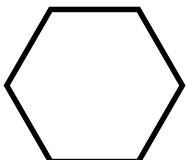


K

I

T

E



H

E

X

A

G

O

N

