


Name: \_\_\_\_\_

Date: \_\_\_\_\_

# Probability Scale



1. Match each statement with its probability.

You will be struck by lightning tomorrow. (Impossible)



● Impossible

You will be younger tomorrow than you are today. (Unlikely)



● Unlikely

If you roll an ordinary dice, you will get a number smaller than 7. (Evens)



● Likely

You will watch this week. (Likely)

● Certain

2. On the probability scale, mark the following events with the appropriate probability.

a. Even chance

b. Likely

c. Very likely

d. Certain

Gain unlimited access to a large collection of interactive digital and print Maths resources

If you are a member, please login to download this worksheet



If you are NOT a member, please sign up to gain complete access



uld find



3. On the probability scale, mark the following events:

a. It will snow at some point next winter.

b. If you toss a coin, you will get tails.

c. If you toss a coin twice, you will get two tails.

d. If you roll a fair, six-sided die, you will score 6.

e. It will rain on at least one day in January.

f. The next person to walk into the classroom is female.

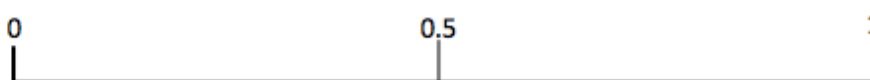
g. You will be older tomorrow than you are today.

h. You will be struck by lightning at some point in your life.


nd the



[www.skoolmaths.com](http://www.skoolmaths.com)



# Probability Scale - Answers



1. Match each statement with its probability.

You will be struck by lightning tomorrow.



Impossible

You will be younger tomorrow than you are today.



Unlikely

If you roll an ordinary dice, you will get a number smaller than 7.



Likely

You will watch this week.



Certain

PREVIEW

2. On the probability scale, mark the following events with the appropriate probability.

- Even chance
- Likely
- Very likely
- Certain

Gain unlimited access to a large collection of interactive digital and print Maths resources

If you are a member, please login to download this worksheet



If you are NOT a member, please sign up to gain complete access



ould find



3. On the probability scale, mark the following events:

- It will snow at some point next winter.
- If you toss a coin, you will get tails.
- If you toss a coin twice, you will get two tails.
- If you roll a fair, six-sided die, you will score 6.
- It will rain on at least one day in January.
- The next person to walk into the classroom is female.
- You will be older tomorrow than you are today.
- You will be struck by lightning at some point in your life.

The answers for a, e, f and h are approximate and can depend upon where you live, the gender divide in your school etc.



[www.skoolmaths.com](http://www.skoolmaths.com)

