

# MULTIPLYING WITH MONEY

Name: \_\_\_\_\_


Score: \_\_\_\_\_

Level: 1

Date: \_\_\_\_\_

## MONEY MATH EXERCISE

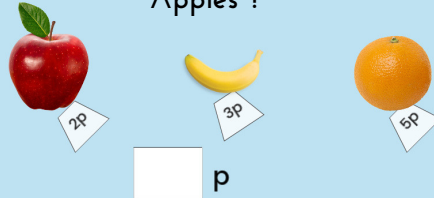
How much money do I need for 5 Bananas ?




How much money do I need for 3 Bananas ?




How much money do I need for 5 Apples ?



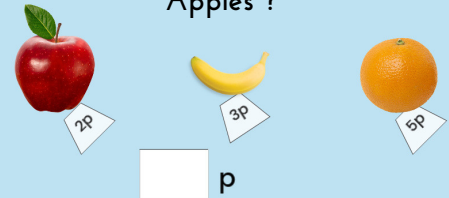
How much money do I need for 5 Oranges ?




How much money do I need for 2 Oranges ?



How much money do I need for 2 Apples ?




How much money do I need for 10 Oranges ?




How much money do I need for 12 Bananas ?



How much money do I need for 11 Oranges ?



How much money do I need for 10 Apples ?



# MULTIPLYING WITH MONEY

Name:

Score:

Level: 1


Date:

## MONEY MATH ANSWER KEY

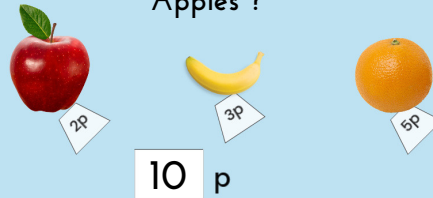
How much money do I need for 5 Bananas ?




How much money do I need for 3 Bananas ?




How much money do I need for 5 Apples ?




How much money do I need for 5 Oranges ?




How much money do I need for 2 Oranges ?



How much money do I need for 2 Apples ?




How much money do I need for 10 Oranges ?




How much money do I need for 12 Bananas ?



How much money do I need for 11 Oranges ?



How much money do I need for 10 Apples ?



Name: \_\_\_\_\_


Score: \_\_\_\_\_

Level: 2


Date: \_\_\_\_\_

## MONEY MATH EXERCISE


How much money do I need for 5 Bananas and 1 Apple ?




How much money do I need for 3 Bananas and 2 Oranges?




How much money do I need for 5 Apples and 2 Oranges?




How much money do I need for 5 Oranges and 3 Bananas?




How much money do I need for 2 Oranges and 6 Apples?




How much money do I need for 2 Apples and 10 Bananas?




How much money do I need for 12 Oranges and 10 Oranges ?




How much money do I need for 12 Bananas and 7 Apples?



How much money do I need for 11 Oranges and 10 Apples?



How much money do I need for 10 Apples and 20 Bananas?



Name:


Score:

Level: 2


Date:

## MONEY MATH ANSWER KEY

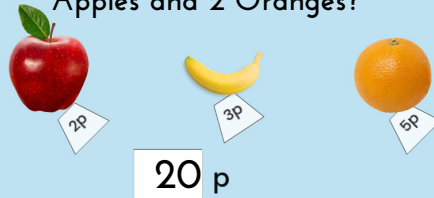
How much money do I need for 5 Bananas and 1 Apple ?




How much money do I need for 3 Bananas and 2 Oranges?




How much money do I need for 5 Apples and 2 Oranges?




How much money do I need for 5 Oranges and 3 Bananas?




How much money do I need for 2 Oranges and 6 Apples?




How much money do I need for 2 Apples and 10 Bananas?




How much money do I need for 12 Oranges and 10 Bananas ?



How much money do I need for 12 Bananas and 7 Apples?



How much money do I need for 11 Oranges and 10 Apples?



How much money do I need for 10 Apples and 20 Bananas?

