

Name: _____

Date: _____



FRACTIONS-HALVES & QUARTERS

What fraction of the apples are green?



- half
- quarter

What fraction of the socks are red?



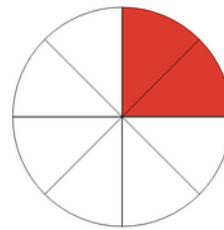
- half
- quarter

What fraction of the shoes are not red?




- half
- quarter

What fraction of the shape is shaded?



- half
- quarter

What fraction of the fish are not blue?



- $\frac{1}{4}$
- $\frac{3}{4}$

Tom said half of the fruits are red. Is he correct?



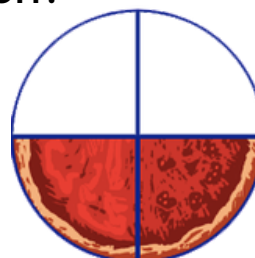
- yes
- no

John said the shape shown is a quarter. Is he correct?



- yes
- no

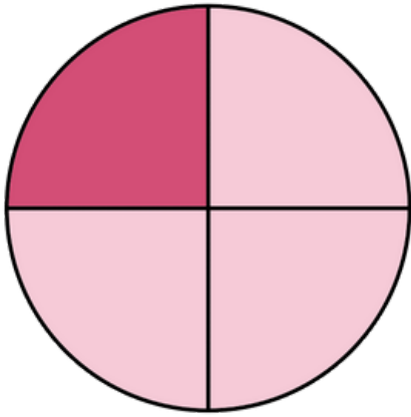
What fraction is pie is eaten?



- half
- quarter

Name: _____

Date: _____



1



Numerator

How many parts
are shaded

4



Denominator

How many parts
in total

FRACTION	SPLIT AND SHADE
$\frac{1}{2}$	
$\frac{1}{4}$	
$\frac{1}{5}$	
$\frac{3}{4}$	