

Name: _____

Date: _____



Calculating Surface Area of Cubes

To find the surface area of a cube, use the formula: **surface area = $6s^2$** , where s is the length of one of the sides.

9 yd

_____ yd^2

2 cm

_____ cm^2

10 ft

_____ ft^2

13 yd

_____ yd^2

15 cm

_____ cm^2

11 ft

_____ ft^2

5 yd

_____ yd^2

18 cm

_____ cm^2

17 ft

_____ ft^2

8 yd

_____ yd^2

7 cm


_____ cm^2

12 ft


_____ ft^2

Calculating Surface Area of Cubes

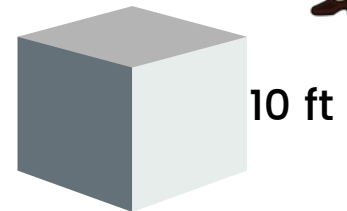
To find the surface area of a cube, use the formula: **surface area = $6s^2$** , where s is the length of one of the sides.




486 yd²




24 cm²



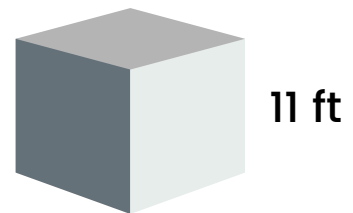
600 ft²




1,014 yd²




1,350 cm²




726 ft²




150 yd²




1,944 cm²



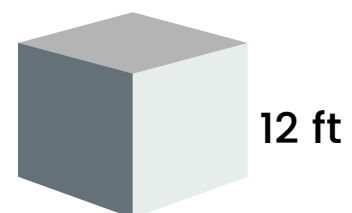
1,734 ft²



384 yd²



294 cm²



864 ft²