



Name: _____

Date: _____

FACES, EDGES & VERTICES

WRITE THE NAME OF EACH SHAPE. ALSO, FIND THE NUMBER OF FACES, EDGES AND VERTICES.



Faces

Edges

Vertices

Name: _____



Faces

Edges

Vertices

Name: _____



Faces

Edges

Vertices

Name: _____




Faces

Edges

Vertices

Name: _____

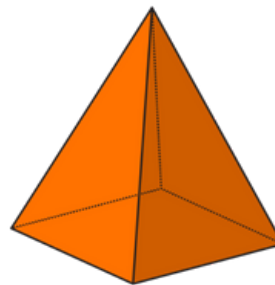


Faces

Edges

Vertices

Name: _____




Faces

Edges

Vertices

Name: _____

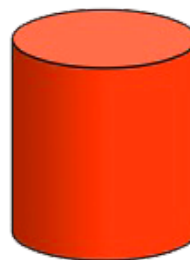


Faces

Edges

Vertices

Name: _____



Faces

Edges

Vertices

Name: _____

FACES, EDGES & VERTICES



ANSWERS



Faces

Edges

Vertices

Name: _____



Faces

Edges

Vertices

Name: _____



Faces

Edges

Vertices

Name: _____




Faces

Edges

Vertices

Name: _____

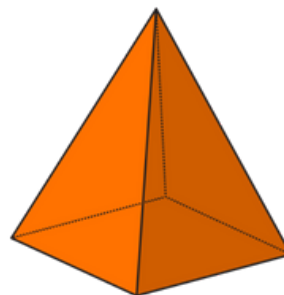


Faces

Edges

Vertices

Name: _____




Faces

Edges

Vertices

Name: _____

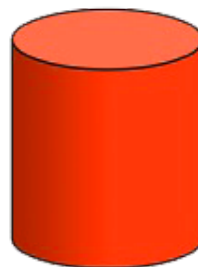


Faces

Edges

Vertices

Name: _____



Faces

Edges

Vertices

Name: _____

NAME: _____

DATE: _____

FACES, EDGES & VERTICES

WRITE THE NAME OF EACH SHAPE. ALSO, FIND THE NUMBER OF FACES, EDGES AND VERTICES.




Faces
Edges
Vertices

Name: _____




Faces
Edges
Vertices

Name: _____



Faces
Edges
Vertices

Name: _____



Faces
Edges
Vertices

Name: _____



Faces
Edges
Vertices

Name: _____



Faces
Edges
Vertices

Name: _____



Faces
Edges
Vertices

Name: _____



Faces
Edges
Vertices

Name: _____

FACES, EDGES & VERTICES



ANSWERS




Faces
Edges
Vertices

Name: _____




Faces
Edges
Vertices

Name: _____



Faces
Edges
Vertices

Name: _____



Faces
Edges
Vertices

Name: _____



Faces
Edges
Vertices

Name: _____



Faces
Edges
Vertices

Name: _____



Faces
Edges
Vertices

Name: _____



Faces
Edges
Vertices

Name: _____