

Name: _____


Date: _____

Using "planet" and "not a planet",
classify each celestial object.

Earth



Sun



Saturn



Astronaut



Mercury



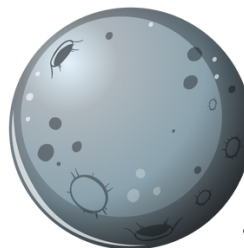
Asteroid



Mars




Moon



Uranus



Comet





ANSWERS


Using "planet" and "not a planet",
classify each celestial object.

Earth




planet

Sun




planet

Saturn



planet

Astronaut



not planet

Mercury



planet

Asteroid




not planet

Mars



planet

Moon



planet

Uranus



planet

Comet



not planet

