

Name: _____

Date: _____



ADDING DOUBLES

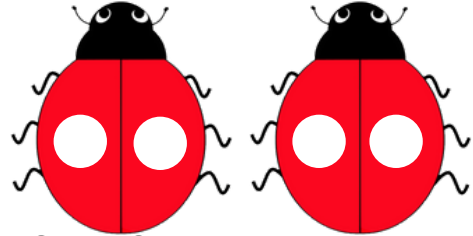
Count the objects and complete each doubles fact.

1.



$1 + 1 = \underline{\hspace{2cm}}$

2.



$2 + 2 = \underline{\hspace{2cm}}$


3.




$5 + 5 = \underline{\hspace{2cm}}$




5.



$6 + 6 = \underline{\hspace{2cm}}$



7.



$7 + 7 = \underline{\hspace{2cm}}$

8.



$9 + 9 = \underline{\hspace{2cm}}$

PREVIEW

Gain unlimited access to a large collection of interactive digital and print Maths resources

If you are a member,
please login to
download this
worksheet



If you are NOT a
member, please sign
up to gain complete
access



www.skoolmaths.com

Name: _____

Date: _____

ADDING DOUBLES

Answer Key

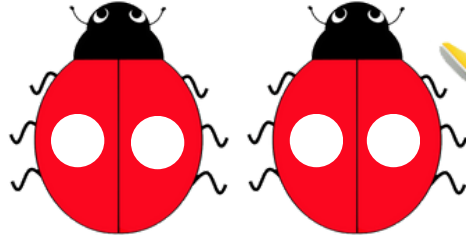


1.



$$1 + 1 = \underline{2}$$

2.



$$2 + 2 = \underline{4}$$

3.




$$5 + 5 = \underline{\quad}$$




$$= \underline{6}$$

5.




$$6 + 6 = \underline{\quad}$$



$$= \underline{8}$$

7.



$$7 + 7 = \underline{14}$$

8.



$$9 + 9 = \underline{18}$$

PREVIEW

Gain unlimited access to a large collection of interactive digital and print Maths resources

If you are a member,
please login to
download this
worksheet



If you are NOT a
member, please sign
up to gain complete
access



www.skoolmaths.com